

Name _____ Period _____

Chapter 25: The History of Life on Earth*Overview*

1. In the last chapter, you were asked about *macroevolution*. To begin this chapter, give some examples of *macroevolution*. Include at least one novel example not in your text.

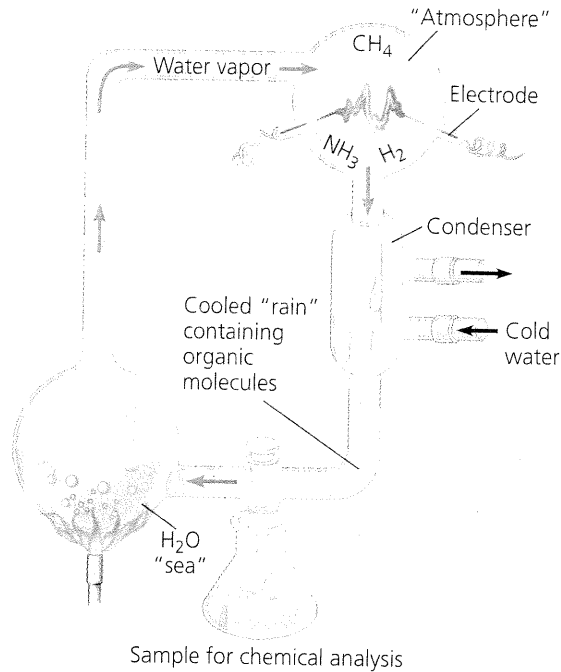
Concept 25.1 Conditions on early Earth made the origin of life possible

2. How old is the planet? _____ How old is the earliest evidence of life on Earth? _____.
3. The current theory of the origin of life suggests a sequence of four main stages. Summarize them here.

1.	
2.	
3.	
4.	

4. In the previous chart, the first stage is the synthesis of organic molecules. Consider the early planet, which was probably thick with water vapor and stinky with methane, ammonia, and hydrogen sulfide. What gas was missing from this early mix? Why?
5. A. I. Oparin and J. B. S. Haldane hypothesized that the early atmosphere was a *reducing environment*. What did they suggest was the source of energy for early organic synthesis?

6. In 1953 at the University of Chicago, Stanley Miller and Harold Urey tested the *Oparin-Haldane hypothesis* with this apparatus. (It is shown in Chapter 4, Figure 4.2, so you have seen it before.) Explain the elements of this experiment, using arrows to indicate what occurs in various parts of the apparatus.

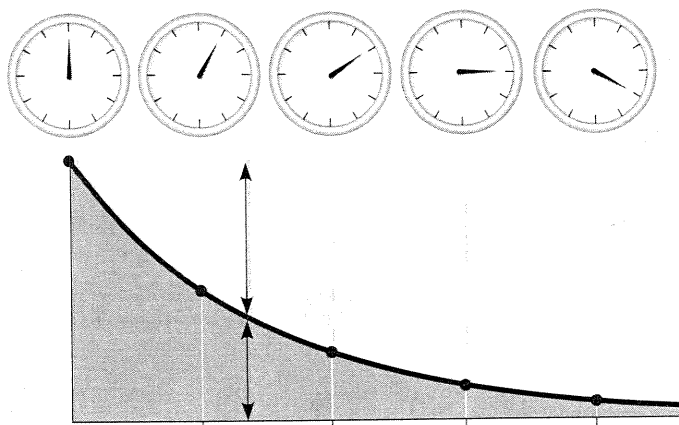


7. What was collected in the sample for chemical analysis? What was concluded from the results of this experiment?
8. What are *proto-cells*? What properties of life do they demonstrate?
9. What did Thomas Cech propose was the first genetic material, DNA or RNA? _____
10. What are *ribozymes*?
11. Explain the evidence for an early "RNA world."

Concept 25.2 *The fossil record documents the history of life*

12. In what type of rock are fossils found? _____
13. What do we *not* know from analyzing rock strata?

14. Rocks and fossils are dated in several ways. *Relative dating* uses the order of rock strata to determine the relative age of fossils. *Radiometric dating* uses the decay of radioactive isotopes to determine the age of the rocks or fossils. It is based on the rate of decay, or **half-life**, of the isotope. To determine the *absolute* age of a fossil, *radiometric dating* is used. Use this figure to explain the concept of radiometric dating. Label the key elements.

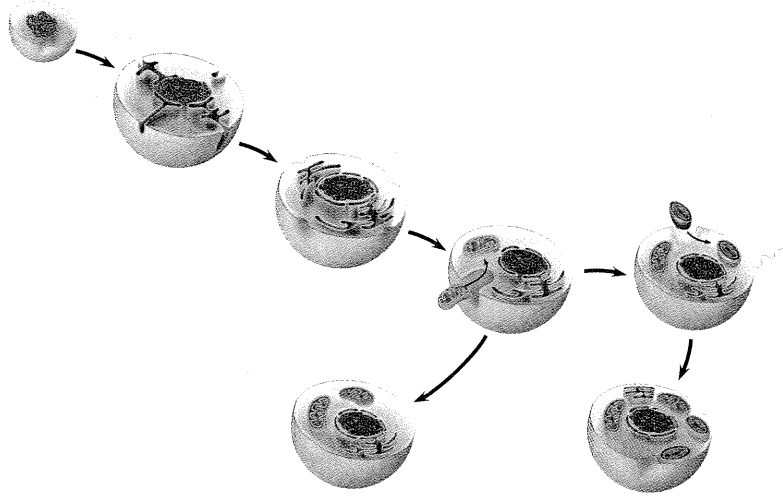


15. What is the age range for which carbon-14 dating may be used?
16. To date fossils outside the range of carbon-14 dating, researchers use indirect methods of establishing absolute fossil age. Explain how this can be done using radioisotopes with longer half-lives.
17. What are the three groups of *tetrapods*?
18. Cite three ways of distinguishing mammal fossils from the other two groups of tetrapods.

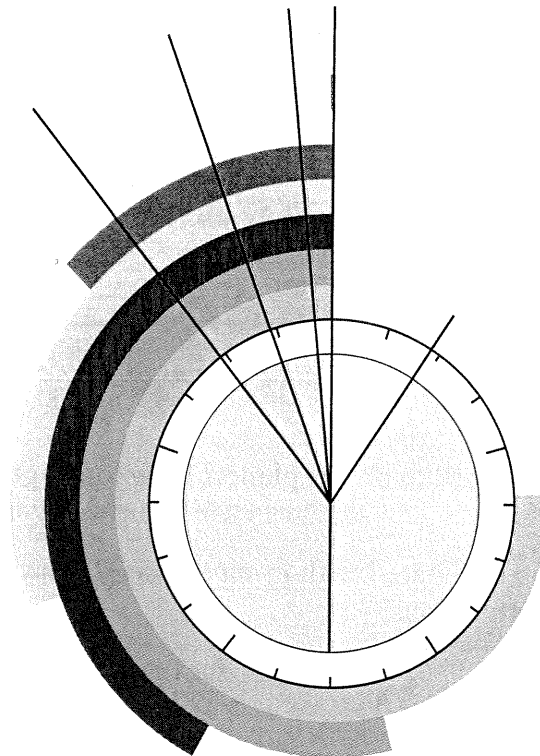
Concept 25.3 *Key events in life's history include the origins of single-celled and multicelled organisms and the colonization of land*

19. What was the earliest form of life on the planet? How long ago did this life-form first occur?
20. What unique ability was originated with *cyanobacteria*? How did this alter life on Earth and lead to a wave of mass extinctions?

21. The first *eukaryotes* did not appear until approximately 2.1 billion years ago. Using the figure, label and explain the evolution of eukaryotes by *endosymbiosis*.

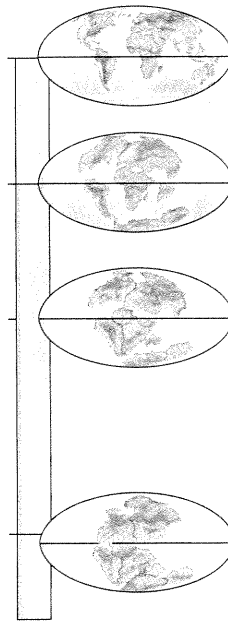


22. Summarize three lines of evidence that support the model of endosymbiosis.
23. Use the clock model to note the following events in the life of the planet: *origin of Earth*, *appearance of prokaryotes*, *evolution of atmospheric oxygen*, *occurrence of eukaryotic cells*, *multi-cellularity*, and *life moves onto land*. For each event, also label the number of years ago it occurred.



Concept 25.4 *The rise and fall of groups of organisms reflect differences in speciation and extinction rates*

24. If you have not studied geology, you will find this concept introduces a fascinating look at the changes in our planet as explained by continental drift. Define *continental drift*. How can continents move?
25. On the following figure, complete the time line on the left, then label *Pangaea*, *Gondwana*, and *Laurasia*. Where was India 65 million years ago?



26. See if you can answer each of these short questions:
- What is the *San Andreas Fault*?
 - What caused the uplift of the Himalayas?
 - How can a fossil freshwater reptile be found in both Brazil and West Africa, areas separated today by a wide expanse of ocean?
 - Why are no *eutherian* (placental) mammals indigenous to Australia?
27. A *mass extinction* is the loss of large numbers of species in a short period, caused by global environmental changes. What caused the *Permian mass extinction* 250 million years ago (mya)? Summarize the species that were lost.

28. A second important mass extinction is the *Cretaceous mass extinction* that happened about 65 mya. Everyone's favorite group, the dinosaurs, was lost, along with more than half of all marine species. What caused it?
29. What are *adaptive radiations*?
30. Why did large-scale adaptive radiation occur after each mass extinction?

Concept 25.5 Major changes in body form can result from changes in the sequences and regulation of developmental genes

31. What two areas of biology are merged in the field of study commonly called *evo-devo*?
32. What is an evolutionary change in the rate or timing of developmental events? _____
33. *Homeotic genes* are master regulatory genes that determine the location and organization of body parts. Mutations in a *homeotic gene* can have a profound effect on morphology. Homeotic gene mutations can contribute to the potential for evolutionary change. The *Hox* genes are one class of homeotic genes. What do they control?

Concept 25.6 Evolution is not goal oriented

34. When a structure that has evolved in one context becomes co-opted for another purpose, this event is called _____. Does exaptation imply that organisms are anticipating future needs? _____ Explain.

Test Your Understanding Answers

Now you should be ready to test your knowledge. Place your answers here:

1. _____ 2. _____ 3. _____ 4. _____ 5. _____ 6. _____
7. _____ 8. _____